

Mental Maths

FS2

I can place numbers up to 10 in order

Order the magnetic numbers

- Q: What number comes next?
- Q: What is 1 more than?
- Q: What is 1 less than?



Build a number tower with cups

- Q: What number comes next?
- Q: What is 1 more than?
- Q: What is 1 less than?




Paperclip numbers in order

- Q: What number comes next?
- Q: What is 1 more than?
- Q: What is 1 less than?



Peg the numbers in order

- Q: Which number comes next?
- Q: What is 1 more than?
- Q: What is 1 less than?



I can count up to 10 from any number
I can count up to 20 from 1
I can count up to 20 from any number

Pass the maths puppet around the circle and count up, starting from 0
Start with different number between 0 and 20 and children to take turns to count up, following the person next to them in the circle.

Counting how many children in class after the register each day

Hold up the number card and children to count up from visible number.

I can count back from 10 to 1
I can count back from 20 to 1

Rocket blast off



Songs to sing:


10 green bottles



Q How many are left?

Songs to sing:

10 little monkeys jumping on the bed



Q How many are left?

I can choose the correct number to represent 1 to 5 objects/ 10 objects

Peg the correct amount of pegs to the number



Choose the correct number of pom poms to match the correct numeral



Cars parked in different garages. Children to make signs with correct numeral on to match the correct number of cars in the garage.



I can place numbers in order up to 20 (as an unbroken chain, starting from 1/ from any given number)

Place the blocks from the largest to the smallest in order



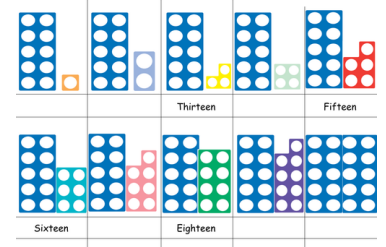
Peg the socks in order on the washing line.



Order the numbers outdoors



Order the numicon pieces



**I can estimate how many objects up to 10 I can see, and check by counting them
I can count up to 10 objects arranged randomly**

Estimate how many pence in the purse



Q: How many coins are in the purse?

Estimate how many spots on the ladybird



Q: How many spots does the ladybird have?

Estimate how many pens in the pot



Q: How many pens are in the pot?

Estimate how many pieces of fruit in the bowl



Q: How many pieces of fruit are in the bowl?

**I can count up to 20 objects
I can say 1 more than any number between 0 – 20**

Create a postage stamp book with 20 stamps inside

Q: What is one more than ___?



Add 16 stripes to the zebra

Q: What is one more than ___?



Fill the piggy bank with 16 coins

Q: What is one more than ___?



Find 14 buttons


Q: What is one more than ___?



I can say 1 less than any number between 0 – 20

Songs to sing:

20 little monkeys jumping on the bed



Create large outdoor bus

14 children get on the bus. 1 passenger gets out.

Q: How many are left?

